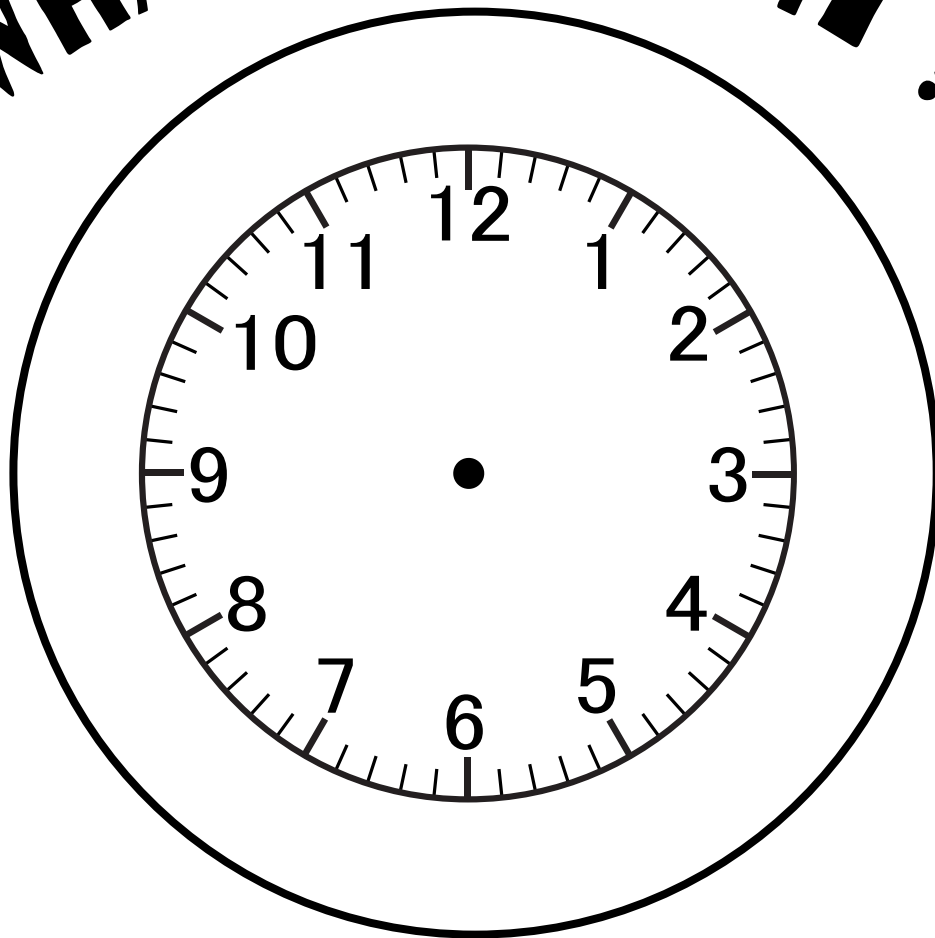
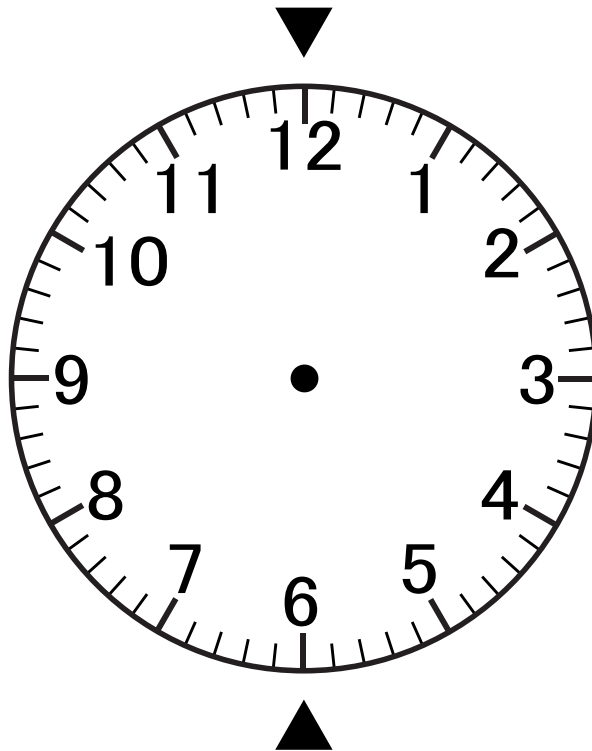


WHAT TIME IS IT?



MP-Education

▶ PRZECZYTAJ ZDANIA I PRZYKŁĘJ WYRAZY W
ODPOWIEDNIE MIEJSCA. UZUPEŁNIJ PRZYKŁAD. ◀



1.00 - It's one o'clock.

1.30 - It's half past one.

3:00 - It's three _____.

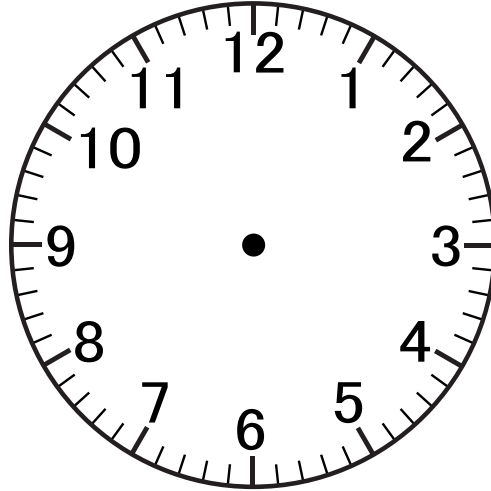
3:30 - It's _____ three.

o'clock

half past



▶ PRZECZYTAJ ZDANIA I PRZYKLEJ WYRAZY W
ODPOWIEDNIE MIEJSCA. UZUPEŁNIJ PRZYKŁAD.



1.00 - It's one o'clock.

1.15 - It's a quarter past one.

1.30 - It's half past one.

1.45 - It's a quarter to two.

5:00 - It's five _____.

5.15 - It's _____ five.

5.30 - It's _____ five.

5.45 - It's _____ six.



o'clock

half past

a quarter
past

a quarter
to



**POŁĄCZ
GODZINY**

It's half
past one

9:15

It's ten
o'clock

6:30

It's a quarter
to three

It's a quarter
past eleven

It's a quarter
to eight

11:15

1:30

5:00

It's five
o'clock

2:45

10:00






It's a
quarter
past two

It's half
past six

7:45

It's a
quarter past
nine

2:15



POKOLORUJ WŁAŚCIWĄ ODPOWIEDŹ

5:30

It's half
past five

It's half
five

It's half
past ten

It's half
past eight

8:30

7:00

It's o'clock
seven

It's seven
o'clock

It's a
quarter to
one

It's a
quarter to
twelve

00:45

2:15

It's a quarter
past two

It's half past
two

It's four
o'clock

It's four
clock

4:00

3:45

It's half
past three

It's a
quarter to
four

It's half
past nine

It's a
quarter
past nine

9:15

10:15


It's a
quarter
past ten

It's a
quarter to
ten

It's a
quarter to
seven

It's to a
quarter
seven

6:45



UZUPEŁNIJ GODZINY BRAKUJĄCYM WYRAZEM LUB LICZBĄ

It's half
past three

3:

It's
past ten

10:30

It's six
o'clock

6:

It's a
quarter
..... two

1:45

It's a quarter
to six

.....:45

..... a
quarter
past one

1:15

It's half
past ten

.....:30

It's nine
.....

9:00

It's a
quarter
past five

.....:15

It's a
.....
to one






0:45

It's a
quarter
to nine


8:.....

It's
.....
o'clock

4:00




POKOLORUJ TYM SAMYM KOLOREM GODZINY ZAPISANE NA TRZY SPOSOBY



It's half past four.

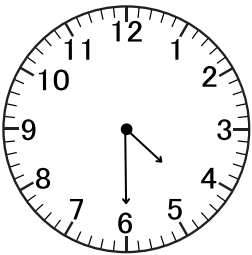
1:00



8:00


7:00

It's half past ten.

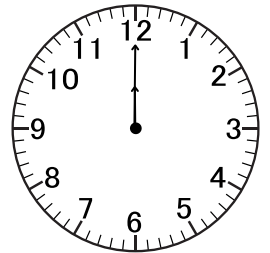


9:30

It's seven o'clock.



It's one o'clock.





It's half past nine.

It's half past one.

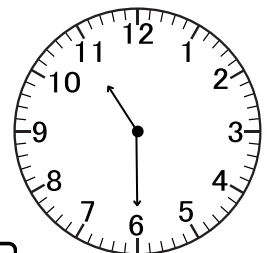
10:30

It's twelve o'clock.



1:30

It's eight o'clock.


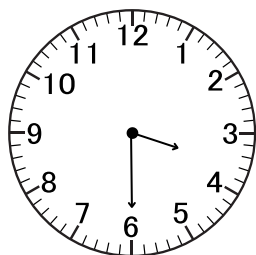


12:00




4:30



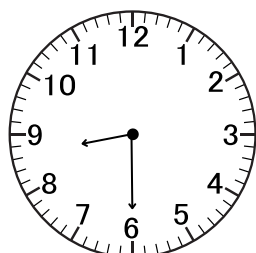
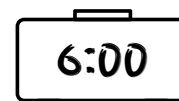
POKOLORUJ TYM SAMYM KOLOREM GODZINY ZAPISANE NA TRZY SPOSOBY




It's a quarter to five.




It's half past six.



It's a quarter past nine.


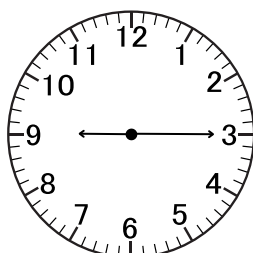
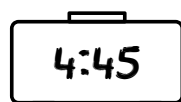


It's six o'clock.




It's half past three.

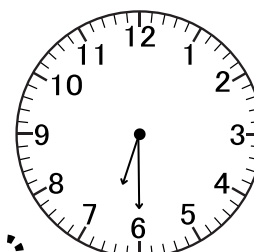
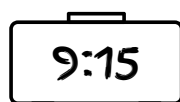
It's half past eight.



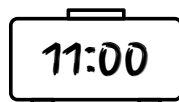
It's five o'clock.



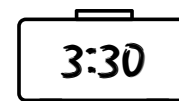
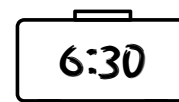
It's a quarter past twelve.




It's eleven o'clock.




It's a quarter to two.




PRZECZYTAJ I ZDECYDUJ KTÓRA ODPOWIEDŹ JEST POPRAWNA



- ☐ It's eight o'clock.
- ☐ It's seven.
- ☐ It's seven o'clock.




- ☐ It's half past three.
- ☐ It's three half past.
- ☐ It's half three past.




- ☐ It's half past five.
- ☐ It's fiwe o'clock.
- ☐ It's five o'clock.



- ☐ It's twelve o'clock.
- ☐ It's ten o'clock.
- ☐ It's ten oclock.




- ☐ It's half past two.
- ☐ It's half past six.
- ☐ It's half past one.




- ☐ It's half past eight.
- ☐ It's past half nine.
- ☐ It's half past five.




PRZECZYTAJ I ZDECYDUJ KTÓRA ODPOWIEDŹ JEST POPRAWNA




- ☐ It's eleven o'clock.
- ☐ It's ten o'clock.
- ☐ It's half past ten clock.




- ☐ It's half past two.
- ☐ It's a quarter past one.
- ☐ It's half past one.




- ☐ It's a quarter past five.
- ☐ It's a past quarter five.
- ☐ It's half past five.



- ☐ It's o'clock seven.
- ☐ It's twelve o'clock.
- ☐ It's seven o'clock.




- ☐ It's four o'clock.
- ☐ It's nine o'clock.
- ☐ It's a quarter to four.




- ☐ It's half past five.
- ☐ It's past half four.
- ☐ It's past five o'clock.




PRZECZYTAJ I ZDECYDUJ KTÓRA ODPOWIEDŹ JEST POPRAWNA




- ☐ It's o'clock three.
- ☐ It's three o'clock.
- ☐ It's a quarter past three.




- ☐ It's half past ten.
- ☐ It's half past six.
- ☐ It's six o'clock.




- ☐ It's a quarter past five.
- ☐ It's a past to five.
- ☐ It's half past five.



- ☐ It's past half seven.
- ☐ It's past seven.
- ☐ It's half past seven.



- ☐ It's quarter past four.
- ☐ It's a quarter to four.
- ☐ It's a quarter past four.



- ☐ It's half past five.
- ☐ It's five o'clock.
- ☐ It's five clock.

